



NAME: _____

MAP IT! NEW HAMPSHIRE INDUSTRIES AND RIVERS

Water power was necessary for machines to work, so many of New Hampshire's industries were built along rivers. The map on the back of this page shows where some of those industries were located around the state. Use the information on that map to answer the following questions.

Test your map reading skills! Can you find and label the following?

- Put an arrow next to the **map scale**.
- Put a square around the **compass rose**.
- Put a circle around the **map key**.
- Put a star next to the **map title**.



Which industry had the most locations? Which industry had the fewest?







Which towns or cities had more than one industry located there?

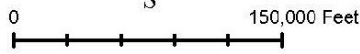
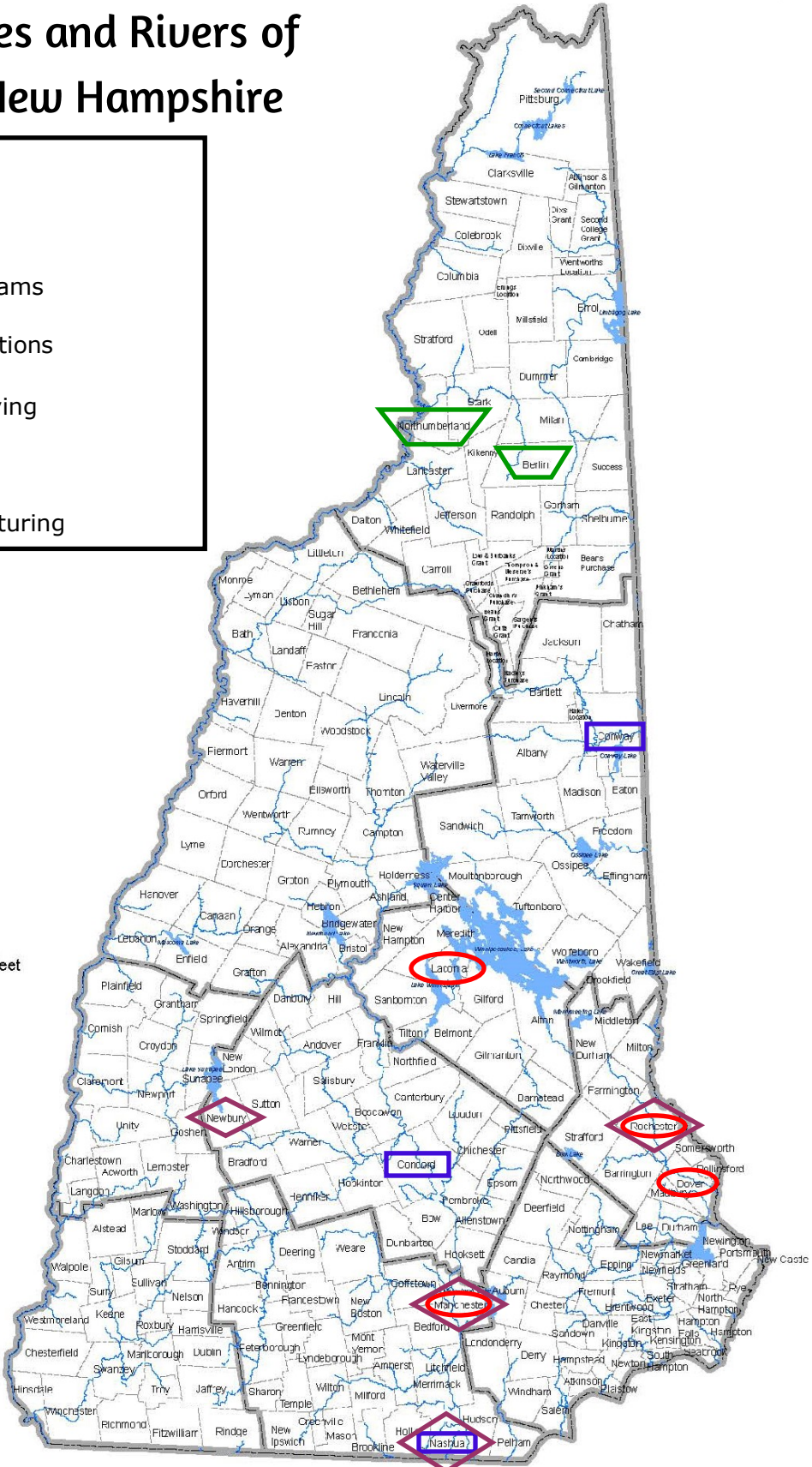
Why do you think logging was only located in the northern part of the state?



Major Industries and Rivers of 19th-century New Hampshire

Map Key

-  Lakes
-  Rivers and Streams
-  Logging Operations
-  Granite Quarrying
-  Textile Mills
-  Shoe Manufacturing



Data Sources:
All data extracted from the NH GRANIT database, Complex Systems Research Center, University of New Hampshire.

Stream Orders from the 2006 New Hampshire Hydrography Dataset (NHHDD), which is an extract from the 1:24,000 scale National Hydrography Dataset (NHD) housed at the US Geological Survey.

